

Numbers to 20


Name: _____ Class: _____ Date: _____

Worksheet 1

Counting to 20

- 1 Circle 10.
Then count on and write the missing numbers.

Example



10 and 1 make .

$$10 + 1 = \text{$$

(a)



10 and make .

$$10 + \text{} = \text{$$


(b)



10 and make .

$$10 + \text{} = \text{}$$


(c)



10 and make .

$$10 + \text{} = \text{}$$

(d)



10 and make .

$$10 + \text{} = \text{}$$