


Writing Amounts of Money

1 Write the amount of money in £.

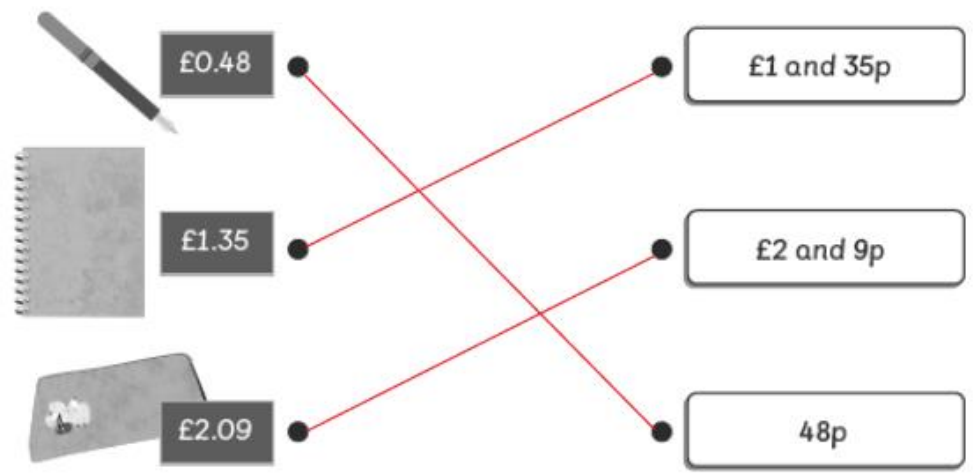
(a)  £




(b)  £

(c)  £

(d)  £

2 Match.



 £0.48
 £1.35
 £2.09

3 Circle the coins which make up the correct amount.

(a)  

(b)  

(c)  

(d)  

(e)  